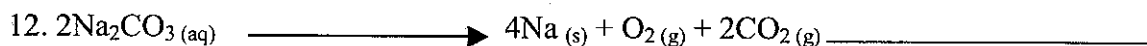
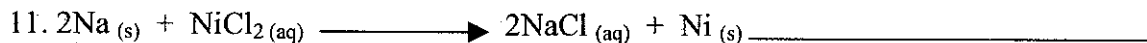

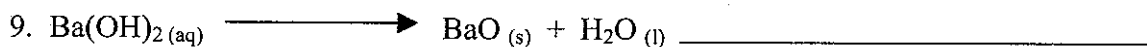
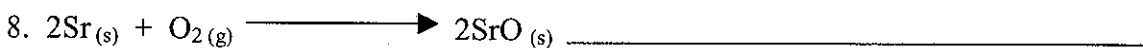
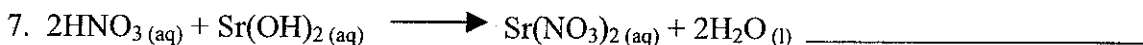
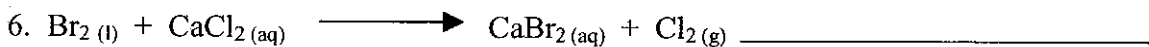


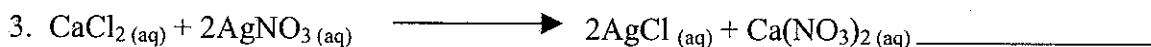
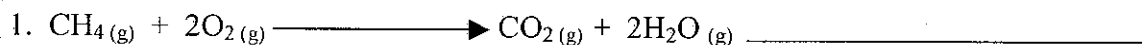


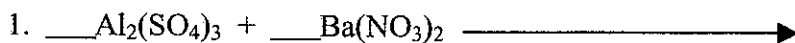
Classifying Chemical Reactions

Name: _____

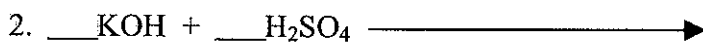
Part I – Classify each of the following reactions:



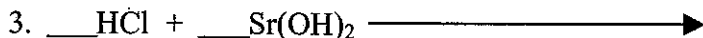
Part II – Predict the products of, balance, and classify each of the following reactions (at room temperature):



Type of Reaction: _____




Type of Reaction: _____



Type of Reaction: _____




Type of Reaction: _____



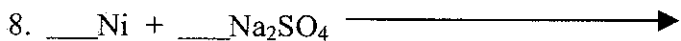
Type of Reaction: _____




Type of Reaction: _____



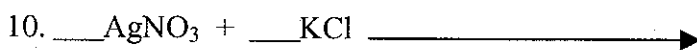
Type of Reaction: _____



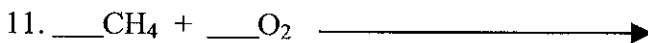
Type of Reaction: _____



Type of Reaction: _____



Type of Reaction: _____




Type of Reaction: _____




Type of Reaction: _____



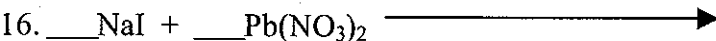
Type of Reaction: _____



Type of Reaction: _____



Type of Reaction: _____



Type of Reaction: _____